



Home Schooling Daily Plan

Year Group: 1

year1@staugustines.dorset.sch.uk

Date: Tuesday 14th July 2020

RE WAGBAT: developing our understanding of Laudato Si – linked to the summer of Hope.

Think of your family.
Who is in your family?
What do you love about them?
Continuing with our theme of 'hope' what do you hope for your family?
Here is my family.



In the picture is my Mum and Dad, my brother Alex and his wife Robyn with their little girl Evie and my husband Ben and myself. This picture was taken when we went to a firework display in Winchester, near to where my brother lives.

I hope for my family that:

- They are all happy and healthy
- That Evie enjoys school and learns lots
- That my parents get to enjoy their retirement and travel as they hope to do
- That my husband gets the job that he wants
- That we get to spend lots of time together again soon – like we did before the Coronavirus!

*Task	**Task	***Task
Draw a picture of your family and write a sentence explaining what you hope for your family.	Draw a picture of your family and write a list of your hopes for your family.	Draw a picture of your family and write a list of your hopes for your family. Write a few sentences explaining why these are your hopes.



Phonics WAGBAT: adding 'ed' to verbs.

English WAGBAT: writing recounts of lockdown for a time capsule.

1) Phonics

Can you remember what a verb is?

What verbs can you think of? Can you come up with 10?

When we add 'ed' to verbs, this turns them into the past tense. This means that the action or verb has already happened in the past.

e.g.

I walk to school. —→ I walkeded to school.

When we say things in the past tense, it often sounds like the words ends in a 't' sound, but we must remember to spell it with 'ed'.

Add 'ed' to these verbs to make them past tense.

whirl	talk
play	want
read	sing
chew	drink

Challenge: can you use each verb with 'ed' to write sentences in the past tense?

2) English – Time capsule

What things have you missed during lockdown?

I have missed not seeing my niece and nephew.

I have also missed not being able to go to the swimming pool.

I've missed not being able to give my mum and dad a hug as they live in a different household.

I have also missed not being able to see my friends and meeting up at the weekend.

What are you looking forward to when this is all over?

I'm looking forward to seeing all of my family and friends and being able to have a cuddle with my new baby nephew.


*Task	**Task	***Task
Write a list of things that you have missed doing during lockdown. Then write a sentence explaining what you are most looking forward to when this is all over.	Write a list of things that you have missed doing during lockdown. Then write a sentence explaining what you are most looking forward to when this is all over and why.	Write a list of things that you have missed doing during lockdown. Explain why you have missed these things. Then write a sentence explaining what you are most looking forward to when this is all over and why.



Maths WAGBAT: problem solving with addition.

Sum up

Choose from these four cards.



Make these totals:

9
10
11
12
13
14
15

What other totals can you make from the cards?

***Task**

****Task**

*****Task**

***Task**

Use the cards to make the numbers 9, 10, 11, 12 and 13.

****Task**

Use the cards to make all of the totals above.

***** Task**

Use the cards to make all of the totals above.

Then see what the largest number you can make is. You can only use addition.

Can you make any other numbers not on the list? How?

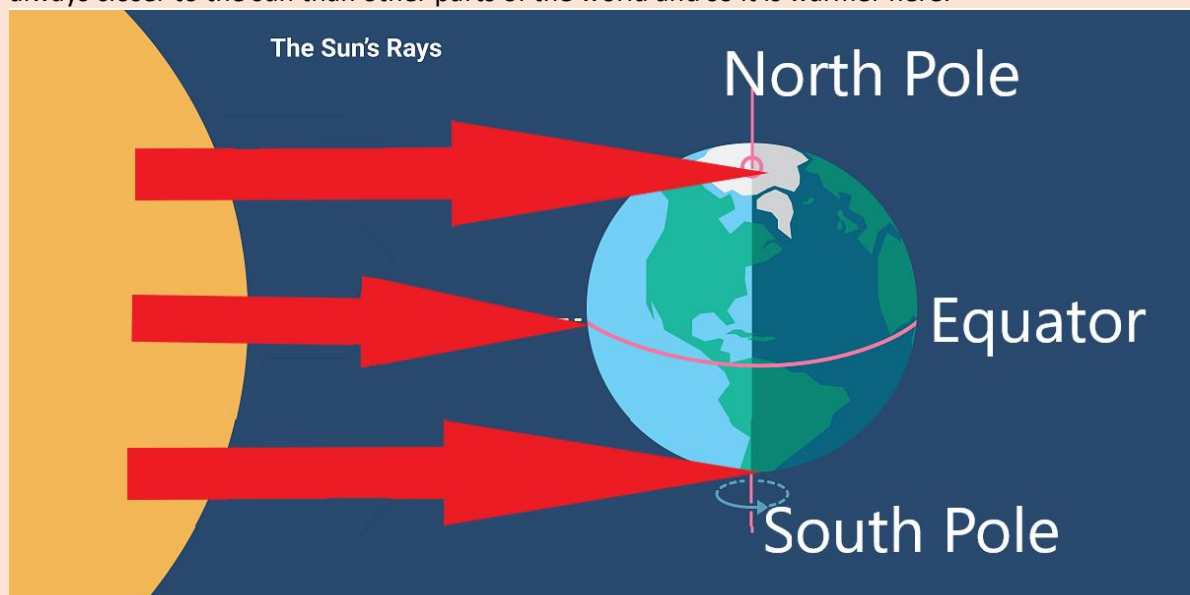


Topic WAGBAT: identifying the location of hot and cold areas of the world in relation to the Equator and the North and South Poles.

Equator
North Pole
South Pole

Have you ever heard these words before? What do you know about them?

The equator is an imaginary line that runs right the way around the middle of the Earth. It runs around the widest part of our planet. Because it is the widest part of the planet, the equator is always closer to the sun than other parts of the world and so it is warmer here.



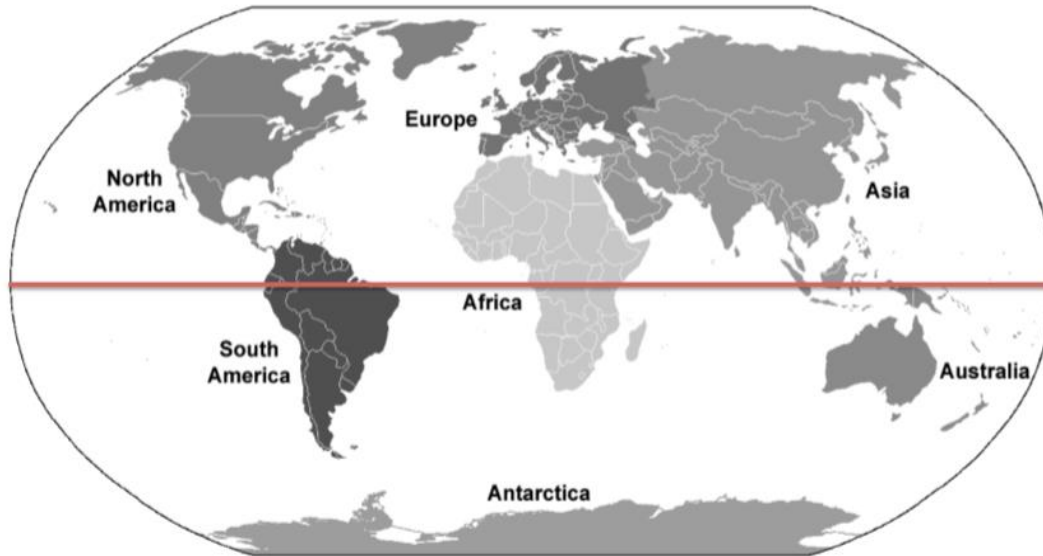
The North and South Poles are the very top and bottom of the planet. This means that the heat from the sun has to travel further to get land and so the poles are colder. This is why there is often lots of snow at the poles.

So... basically the closer you get to the equator, the warmer it becomes and the further away from the equator you get, the colder it is.

*Task	**Task	***Task
warmer	colder	equator
		poles
Using the words above, write a sentence to explain:		
1) What the weather is like near the equator.		
2) What the weather is like at the North and South Pole.		
Then...		



Look at the map of the world below. Label the North and South Poles, and the Equator. Then colour in the very hot and very cold areas of the world.



Website links